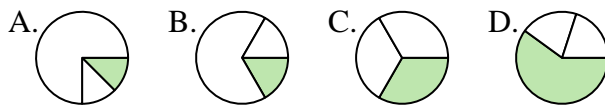




Determine which letter best represents each fraction.

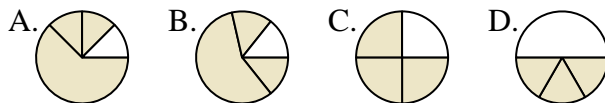
Answers

1) Which choice best shows $\frac{1}{3}$?



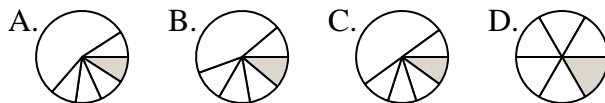
1. _____

2) Which choice best shows $\frac{3}{4}$?



2. _____

3) Which choice best shows $\frac{1}{6}$?



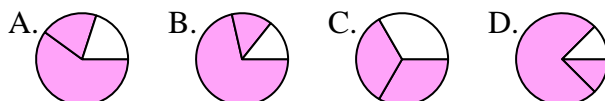
3. _____

4) Which choice best shows $\frac{6}{8}$?



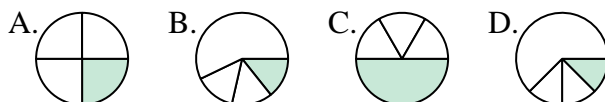
4. _____

5) Which choice best shows $\frac{2}{3}$?



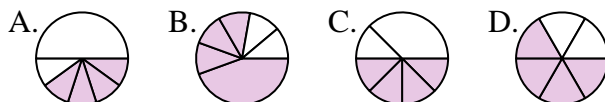
5. _____

6) Which choice best shows $\frac{1}{4}$?



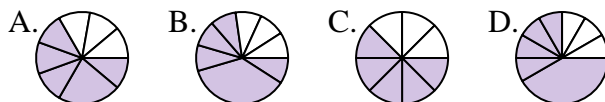
6. _____

7) Which choice best shows $\frac{4}{6}$?



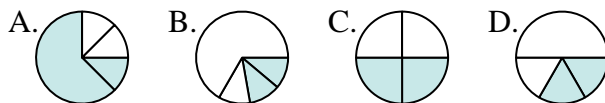
7. _____

8) Which choice best shows $\frac{5}{8}$?



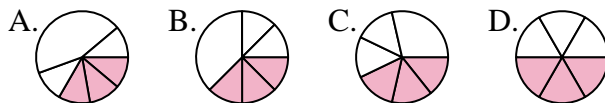
8. _____

9) Which choice best shows $\frac{2}{4}$?



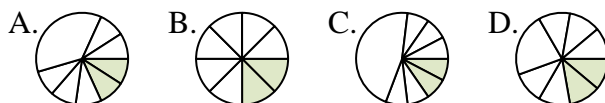
9. _____

10) Which choice best shows $\frac{3}{6}$?



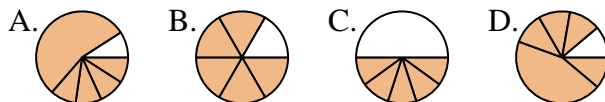
10. _____

11) Which choice best shows $\frac{2}{8}$?



11. _____

12) Which choice best shows $\frac{5}{6}$?

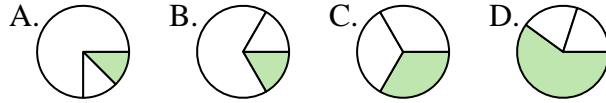


12. _____

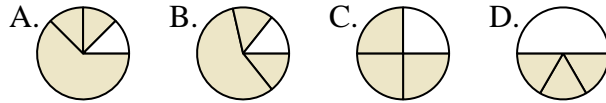


Determine which letter best represents each fraction.

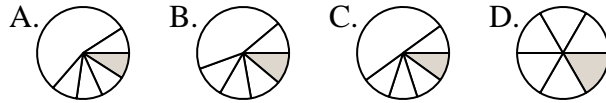
1) Which choice best shows $\frac{1}{3}$?



2) Which choice best shows $\frac{3}{4}$?



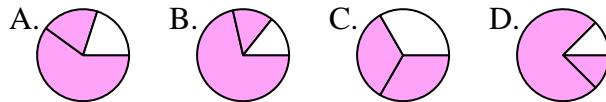
3) Which choice best shows $\frac{1}{6}$?



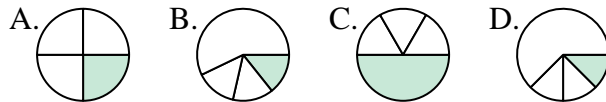
4) Which choice best shows $\frac{6}{8}$?



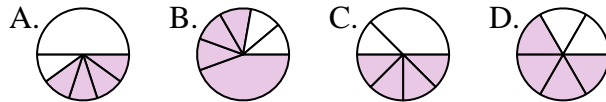
5) Which choice best shows $\frac{2}{3}$?



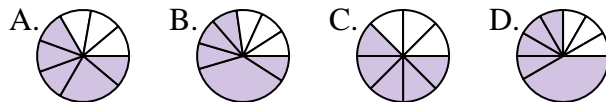
6) Which choice best shows $\frac{1}{4}$?



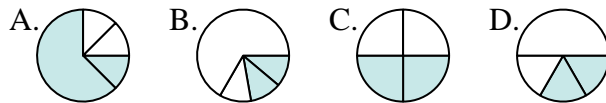
7) Which choice best shows $\frac{4}{6}$?



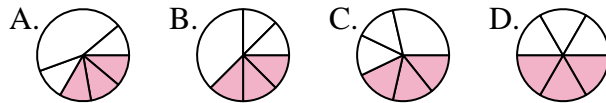
8) Which choice best shows $\frac{5}{8}$?



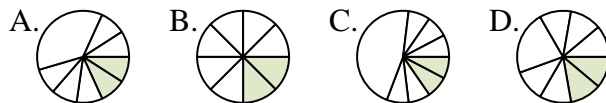
9) Which choice best shows $\frac{2}{4}$?



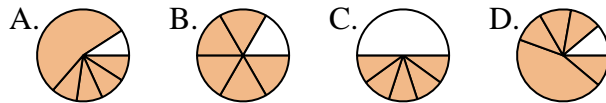
10) Which choice best shows $\frac{3}{6}$?



11) Which choice best shows $\frac{2}{8}$?



12) Which choice best shows $\frac{5}{6}$?



Answers

1. **C**

2. **C**

3. **D**

4. **D**

5. **C**

6. **A**

7. **D**

8. **C**

9. **C**

10. **D**

11. **B**

12. **B**