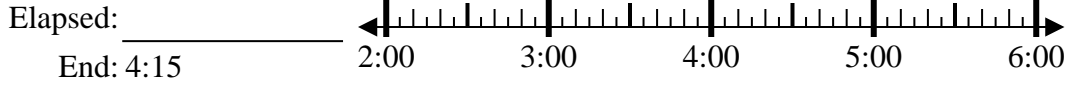


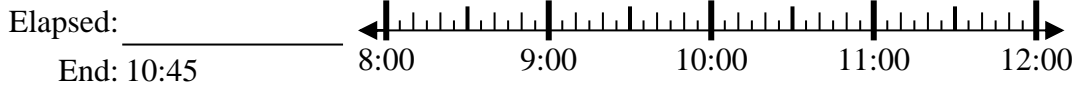


Solve each problem.

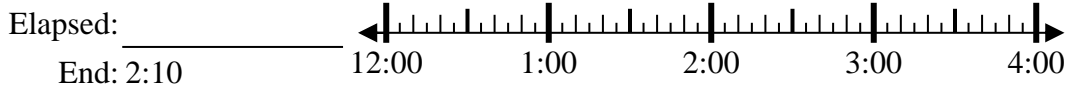
1) Start: 2:40



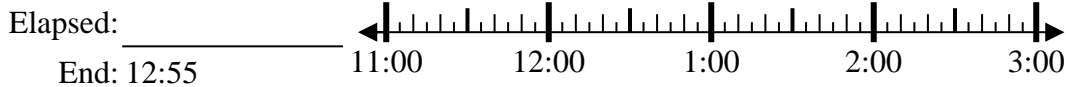
2) Start: 8:10



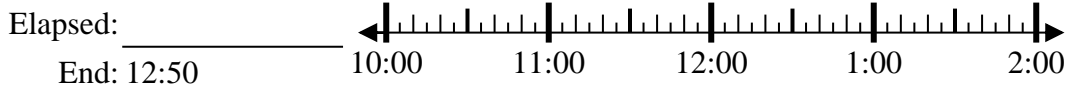
3) Start: 12:45



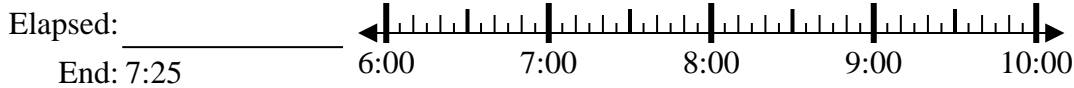
4) Start: 11:25



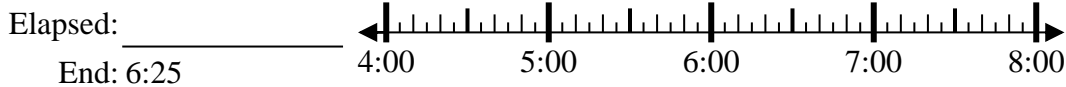
5) Start: 10:35



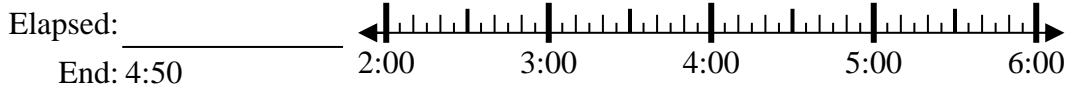
6) Start: 6:15



7) Start: 4:55



8) Start: 2:30



Answers

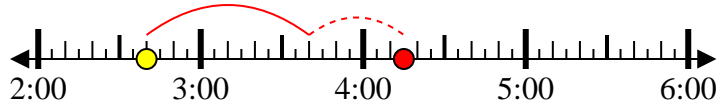
1. _____
2. _____
3. _____
4. _____
5. _____
6. _____
7. _____
8. _____



Solve each problem.

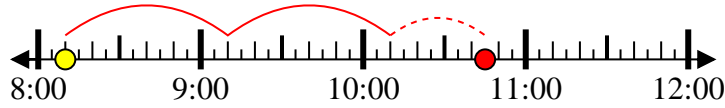
1) Start: 2:40

Elapsed: 1 hr & 35 mins
End: 4:15



2) Start: 8:10

Elapsed: 2 hrs & 35 mins
End: 10:45



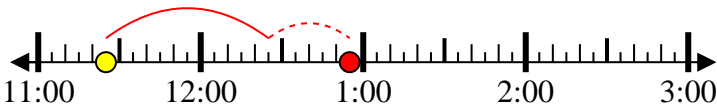
3) Start: 12:45

Elapsed: 1 hr & 25 mins
End: 2:10



4) Start: 11:25

Elapsed: 1 hr & 30 mins
End: 12:55



5) Start: 10:35

Elapsed: 2 hrs & 15 mins
End: 12:50



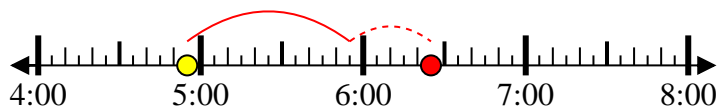
6) Start: 6:15

Elapsed: 1 hr & 10 mins
End: 7:25



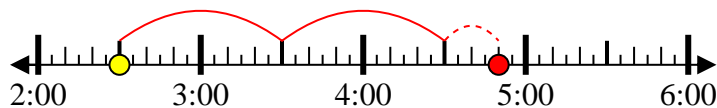
7) Start: 4:55

Elapsed: 1 hr & 30 mins
End: 6:25



8) Start: 2:30

Elapsed: 2 hrs & 20 mins
End: 4:50



Answers

1. 1 hr & 35 mins
2. 2 hrs & 35 mins
3. 1 hr & 25 mins
4. 1 hr & 30 mins
5. 2 hrs & 15 mins
6. 1 hr & 10 mins
7. 1 hr & 30 mins
8. 2 hrs & 20 mins