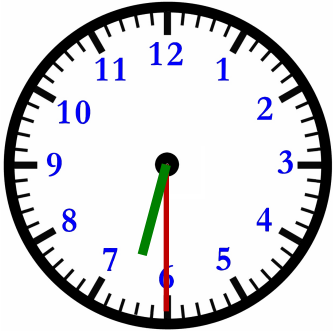


Name : _____

Score : _____

Teacher : _____

Date : _____



Clock A

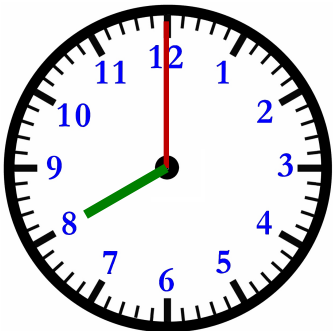


Clock B

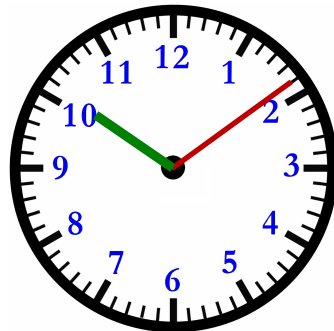
What time is on Clock A ? _____

What time is on Clock B ? _____

How much time has elapsed between Clock A and B ? _____



Clock A

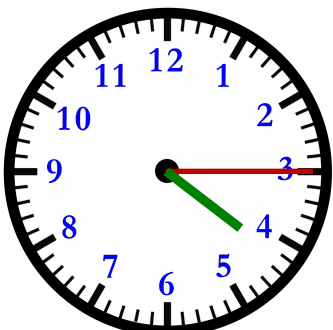


Clock B

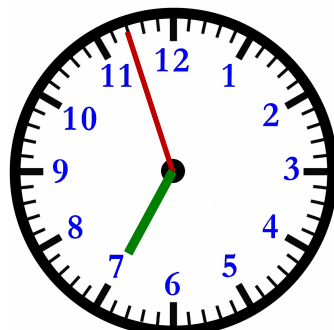
What time is on Clock A ? _____

What time is on Clock B ? _____

How much time has elapsed between Clock A and B ? _____



Clock A

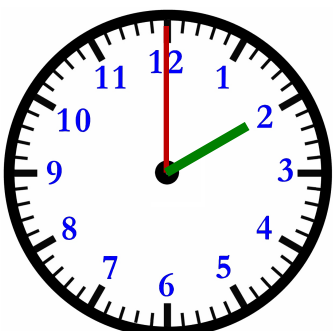


Clock B

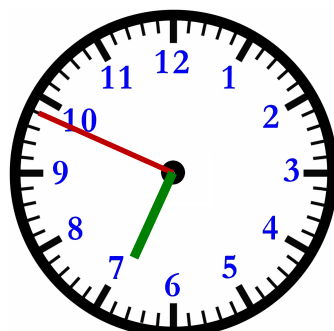
What time is on Clock A ? _____

What time is on Clock B ? _____

How much time has elapsed between Clock A and B ? _____



Clock A



Clock B

What time is on Clock A ? _____

What time is on Clock B ? _____

How much time has elapsed between Clock A and B ? _____

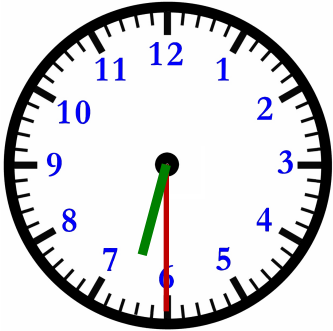


Name : _____

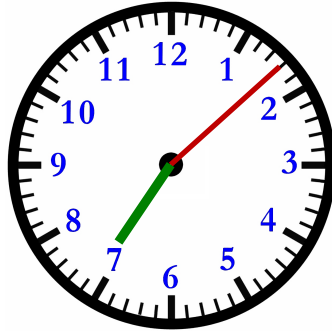
Score : _____

Teacher : _____

Date : _____



Clock A



Clock B

What time is on Clock A ? 6:30

What time is on Clock B ? 7:08

How much time has elapsed between Clock A and B ? 0 hrs and 38 mins



Clock A

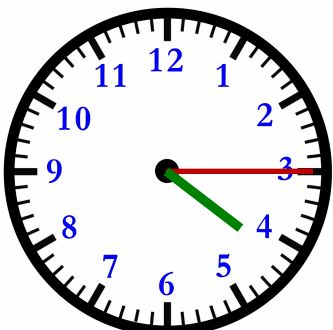


Clock B

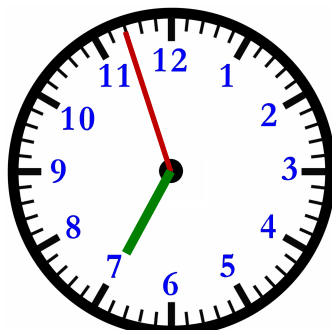
What time is on Clock A ? 8:00

What time is on Clock B ? 10:09

How much time has elapsed between Clock A and B ? 2 hrs and 9 mins



Clock A

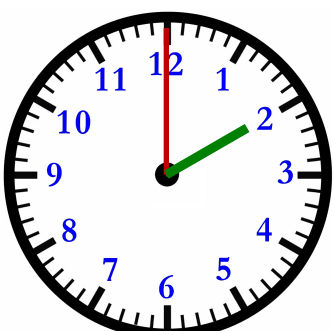


Clock B

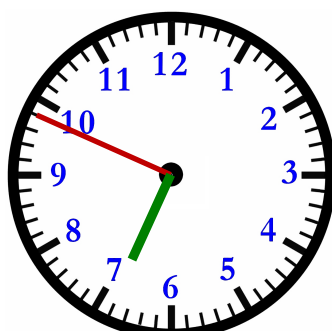
What time is on Clock A ? 4:15

What time is on Clock B ? 6:57

How much time has elapsed between Clock A and B ? 2 hrs and 42 mins



Clock A



Clock B

What time is on Clock A ? 2:00

What time is on Clock B ? 6:49

How much time has elapsed between Clock A and B ? 4 hrs and 49 mins

