

Name : \_\_\_\_\_

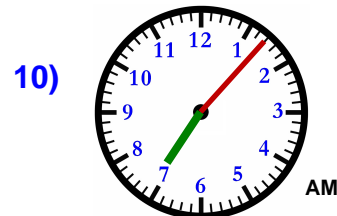
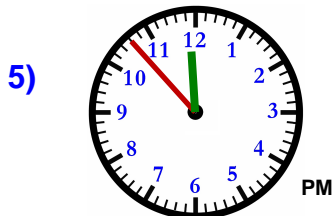
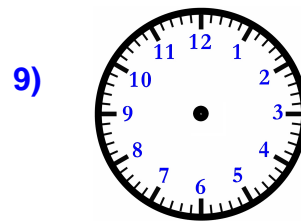
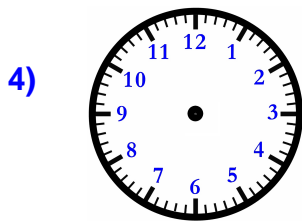
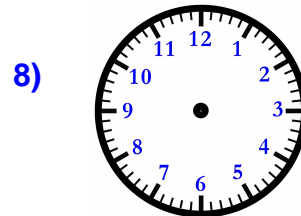
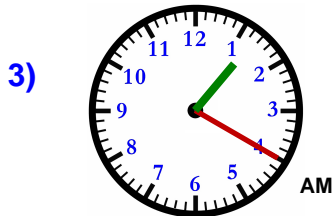
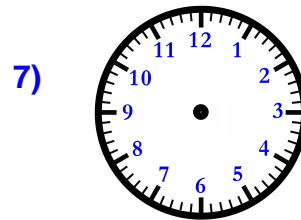
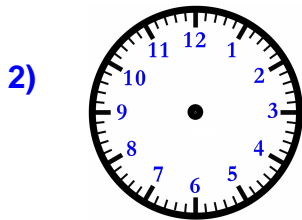
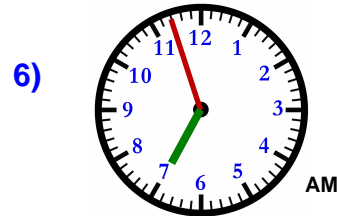
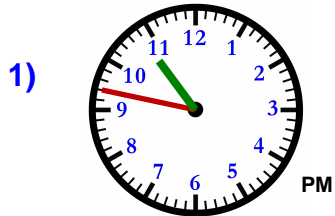
Score : \_\_\_\_\_

Teacher : \_\_\_\_\_

Date : \_\_\_\_\_

## Filling In Time On Clocks

Fill out each missing clock based off the time of its pair.



Name : \_\_\_\_\_

Score : \_\_\_\_\_

Teacher : \_\_\_\_\_

Date : \_\_\_\_\_

## Filling In Time On Clocks

Fill out each missing clock based off the time of its pair.

